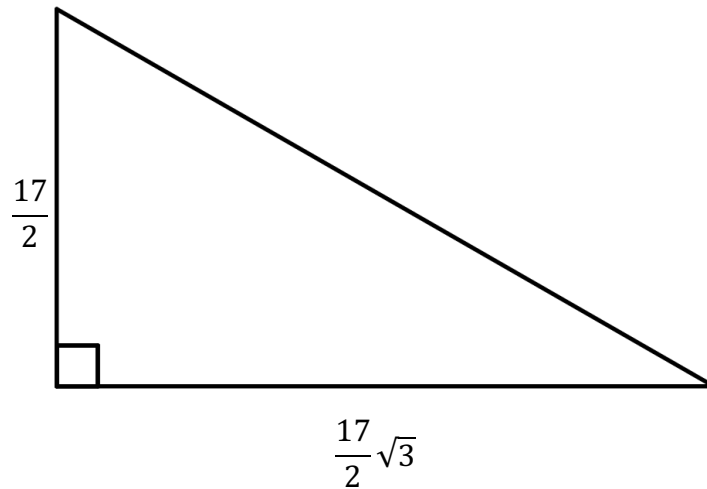
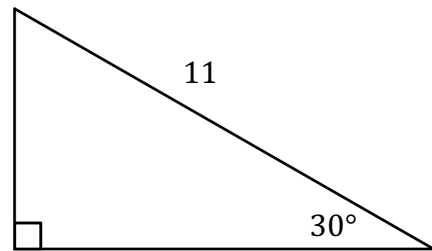
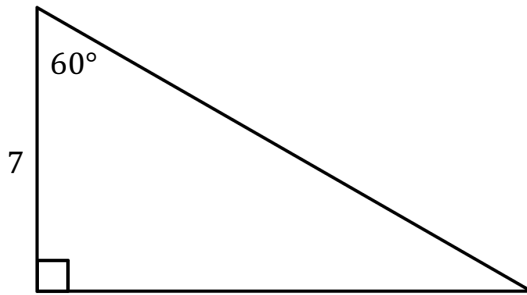


Name \_\_\_\_\_

Date \_\_\_\_\_

**Right Triangles**  
**Special Right Triangles:  $30^\circ - 60^\circ - 90^\circ$**   
**Mini Assessment**

1. Consider the following triangles.



Determine the sum of the areas of the three triangles shown above.

